


## AB Verliebte Zahlen 1


Schreibe die verliebte Zahl in das Herz und rechne die Aufgabe.



$$0 + \underline{\quad} = 10$$



$$1 + \underline{\quad} = 10$$



$$2 + \underline{\quad} = 10$$



$$3 + \underline{\quad} = 10$$



$$4 + \underline{\quad} = 10$$




$$5 + \underline{\quad} = 10$$



$$6 + \underline{\quad} = 10$$



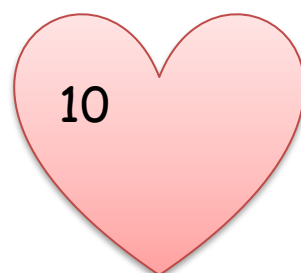
$$7 + \underline{\quad} = 10$$



$$8 + \underline{\quad} = 10$$



$$9 + \underline{\quad} = 10$$



$$10 + \underline{\quad} = 10$$