


Name: _____


Klasse: _____

Datum: _____

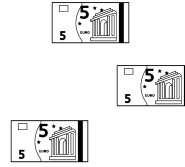
1



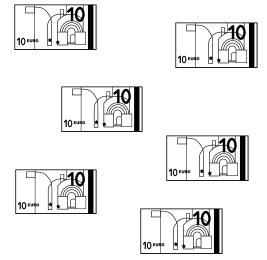
$$7 \cdot 1 =$$



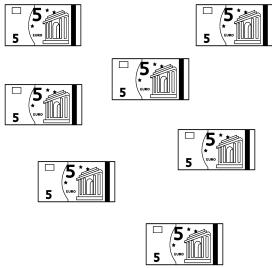
$$\cdot =$$



$$\cdot =$$




$$\cdot =$$




$$\cdot =$$



$$\cdot =$$




$$\cdot =$$




$$\cdot =$$

2


Zeichne ein Bild zur Malaufgabe.




$$4 \cdot 2 =$$




$$8 \cdot 1 =$$




$$2 \cdot 10 =$$



$$5 \cdot 5 =$$




$$6 \cdot 2 =$$



$$4 \cdot 5 =$$



$$1 \cdot 1 =$$



$$3 \cdot 10 =$$